

B. line and angle relationships

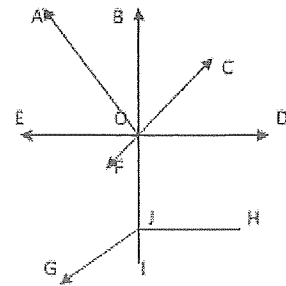
Vocabulary you should remember from elementary and middle school:

ray	line	line segment
adjacent	vertical angles	complementary angles
supplementary angles	linear pair	triangle sum theorem

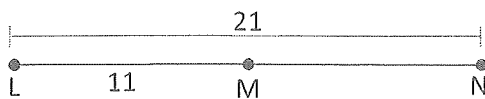
Practice for line and angle relationships

Fill in the blanks with ray, line or line segment.

1. OA is a _____
2. ED is a _____
3. JH is a _____
4. IB is a _____
5. OJ is a _____



6. Find MN.




7. Find SU.

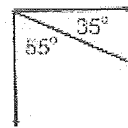


Identify each pair of angles as adjacent, vertical, complementary, supplementary or a linear pair.

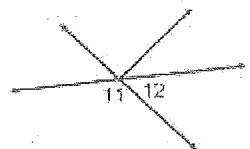
8.



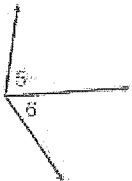
9.




10.



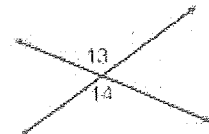
11.



12.



13.

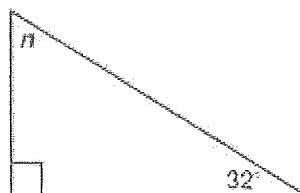


Find the missing angle.

14.



15.



16.

