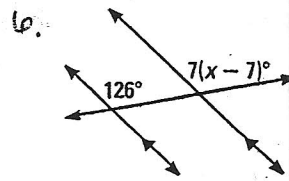
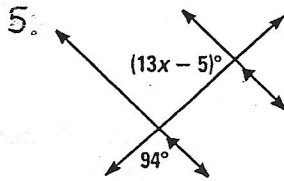
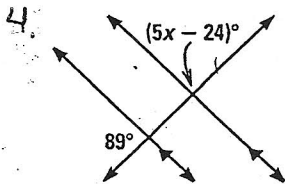
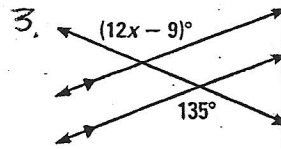
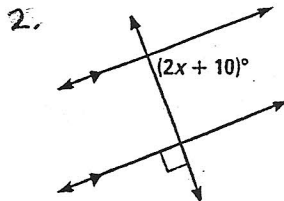
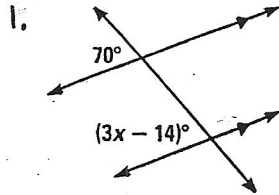
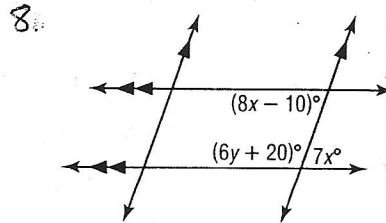
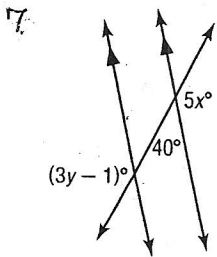
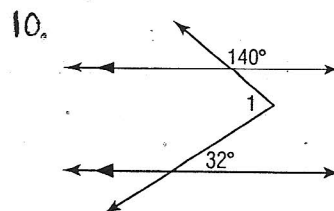
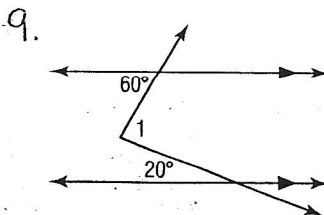


**3-2****Skills Practice****Angles and Parallel Lines****17 USING ALGEBRA** Find the value of  $x$ .Find  $x$  and  $y$  in each figure.Find  $m\angle 1$  in each figure.

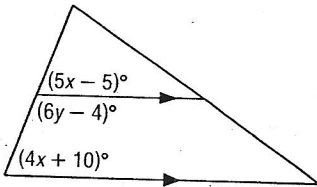
# 3-2 Study Guide and Intervention *(continued)*

## Angles and Parallel Lines

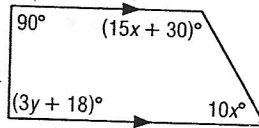
### Exercises

Find  $x$  and  $y$  in each figure.

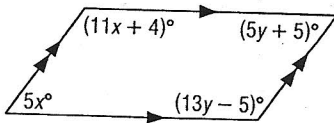
1.



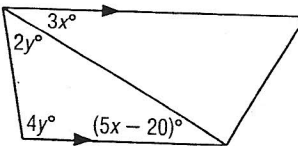
2.



3.

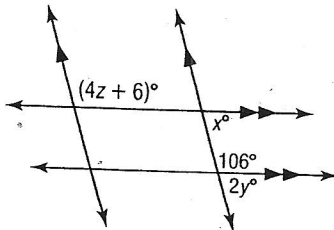


4.

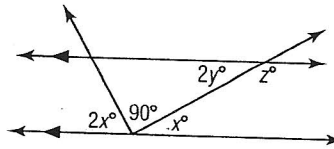


Find  $x$ ,  $y$ , and  $z$  in each figure.

5.

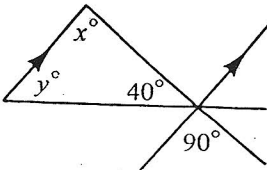


6.

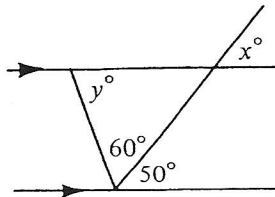


Find  $x$  and  $y$  in each figure.

7.



8.



9.

